



Cambridge IGCSE™


CANDIDATE
NAME

CENTRE
NUMBER

--	--	--	--	--	--

CANDIDATE
NUMBER

--	--	--	--	--



MATHEMATICS

0580/12

Paper 1 (Core)

October/November 2023

1 hour

You must answer on the question paper.

You will need: Geometrical instruments

INSTRUCTIONS

- Answer **all** questions.
- Use a black or dark blue pen. You may use an HB pencil for any diagrams or graphs.
- Write your name, centre number and candidate number in the boxes at the top of the page.
- Write your answer to each question in the space provided.
- Do **not** use an erasable pen or correction fluid.
- Do **not** write on any bar codes.
- You should use a calculator where appropriate.
- You may use tracing paper.
- You must show all necessary working clearly.
- Give non-exact numerical answers correct to 3 significant figures, or 1 decimal place for angles in degrees, unless a different level of accuracy is specified in the question.
- For π , use either your calculator value or 3.142.

INFORMATION

- The total mark for this paper is 56.
- The number of marks for each question or part question is shown in brackets [].

This document has **12** pages. Any blank pages are indicated.

- 1 Write $\frac{8}{10}$ as a decimal.

..... [1]

- 2 Asha works in a café.
Her wage is calculated using the formula $\text{wage} = \text{hourly rate} \times \text{number of hours} + \text{bonus}$.
Her hourly rate is \$11.52 .
One week Asha works 25 hours and receives a bonus of \$5.40 .

Work out her wage for this week.

\$ [2]

- 3 These are the first four terms in a sequence.

−3 4 11 18

- (a) Find the next term.

..... [1]

- (b) Explain how you worked out your answer.

..... [1]

- 4 Work out $\frac{2}{5}$ of 180.

..... [1]

- 5 Write these numbers in order, starting with the smallest.

$\frac{3}{16}$ 18.7% 0.19 $\frac{9}{50}$

..... < < < [2]
smallest

3

6 Write down the number that is 9 greater than -23 .

..... [1]

7 For 16 days, Safia records the number of dresses she sells.

24	6	18	14	27	37	9	16
22	17	16	16	24	20	15	32

(a) Complete the stem-and-leaf diagram.

0	
1	
2	
3	

Key: $2|4$ represents 24 dresses

[2]

(b) Write down the mode.

..... [1]

(c) Find the median.

..... [1]

8 Write 24.07839

(a) correct to 2 decimal places

..... [1]

(b) correct to the nearest 10.

..... [1]

9 $v = u + at$

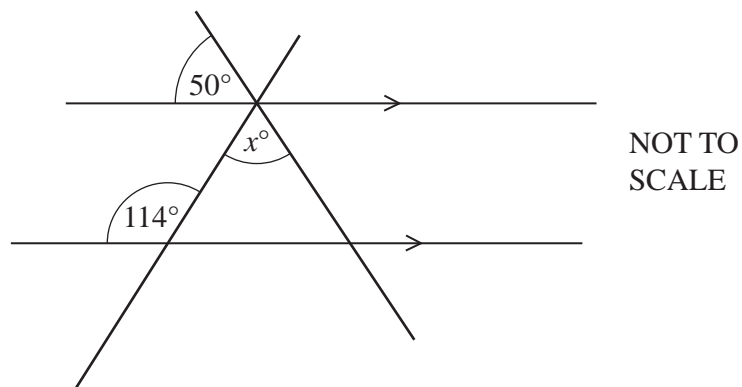
Find the value of v when $u = 30$, $a = -2$ and $t = 7$.

$v =$ [2]

10 Change 62 000 millimetres into kilometres.

..... km [1]

11



The diagram shows two straight lines crossing two parallel lines.

Find the value of x .

$x =$ [2]

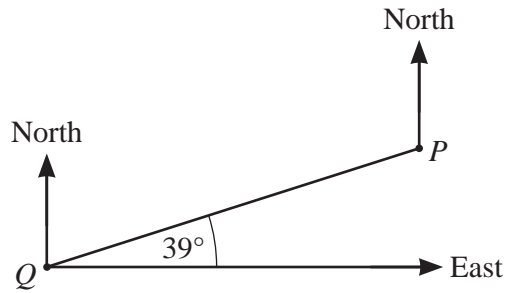
12 (a) Explain why 111 is not a prime number.

..... [1]

(b) Find a prime number between 110 and 120.

..... [1]

13



NOT TO SCALE

Find the bearing of Q from P.

..... [2]

14 (a) As the age of a car increases, the selling price decreases.

What type of correlation is this?

..... [1]

(b) Write down the type of correlation there is between the height of a driver and the value of their car.

..... [1]

15 Calculate the interior angle of a regular 9-sided polygon.

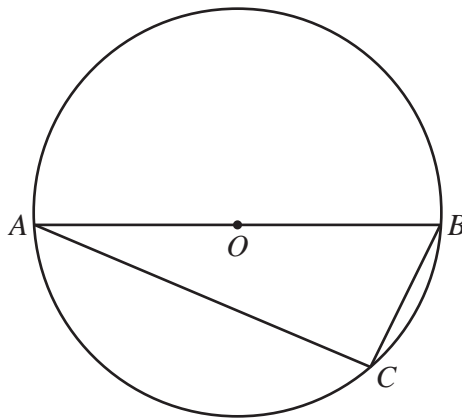
..... [2]

16 Filip invests \$4000 for 3 years at a rate of 2.5% per year simple interest.

Calculate the value of his investment at the end of the 3 years.

\$ [3]

17



NOT TO SCALE

A , B and C are points on a circle, centre O .

(a) Draw a tangent to the circle at point A . [1]

(b) The circumference of the circle is 22.3 cm.

Calculate the radius of the circle.

..... cm [2]

(c) Give a geometrical reason why angle BCA is 90° .

..... [1]

18 Expand and simplify.

$$2(t+w) + 3(w-t)$$

..... [2]

19 **Without using a calculator**, work out $3\frac{1}{8} - 1\frac{3}{4}$.

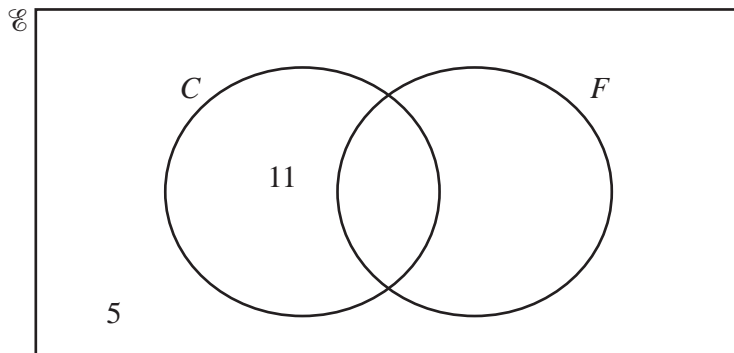
You must show all your working and give your answer as a mixed number in its simplest form.

..... [3]

- 20 $\mathcal{U} = \{\text{students in a class}\}$
 $C = \{\text{students who play cricket}\}$
 $F = \{\text{students who play football}\}$

There are 36 students in the class.
 15 students play cricket.
 20 students play football.

(a)



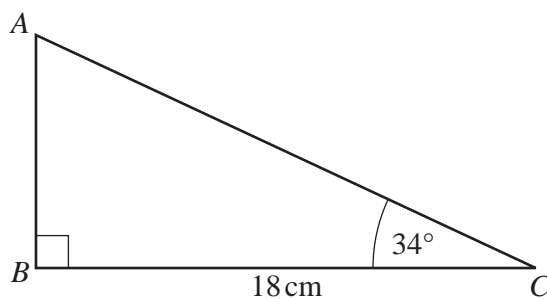
Complete the Venn diagram.

[2]

(b) Write down $n(C \cup F)$.

..... [1]

- 21 ABC is a right-angled triangle.

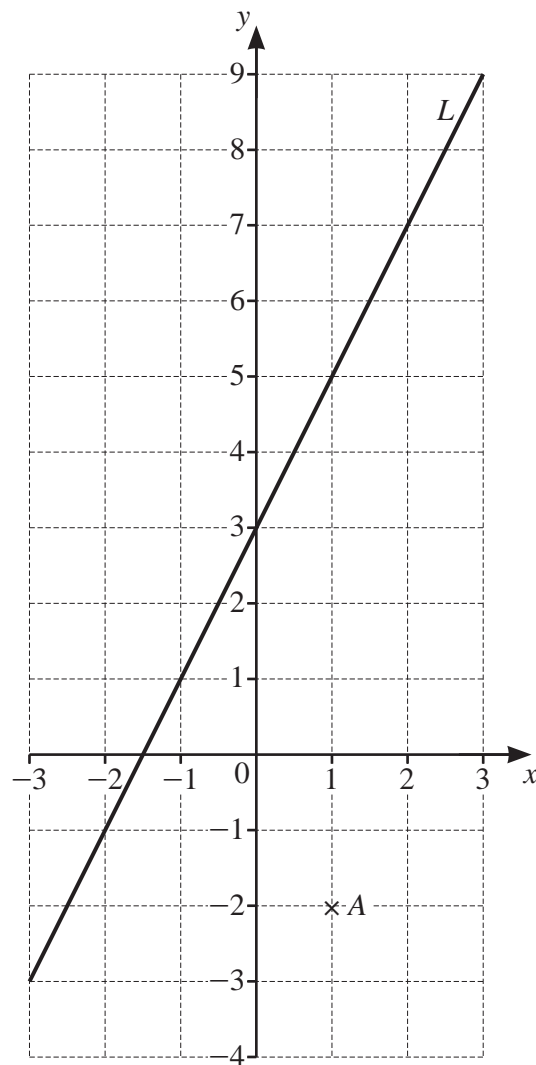


NOT TO SCALE

Calculate AC .

$AC = \dots\dots\dots$ cm [3]

22 Point A and line L are shown on the grid.



(a) Write down the coordinates of point A .

(..... ,) [1]

(b) On the grid, plot the point $(-2, 4)$.

[1]

(c) Find the equation of line L .

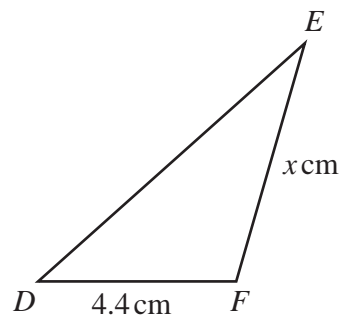
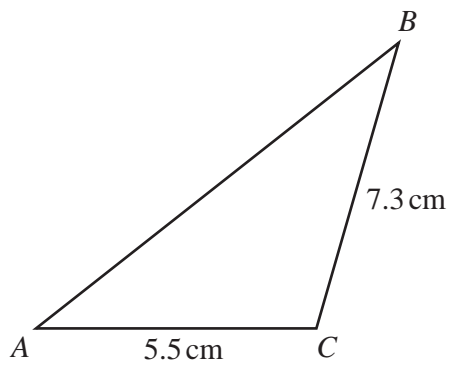
..... [3]

- 23 Bell *A* rings every 22 minutes.
 Bell *B* rings every 14 minutes.
 Both bells ring at 0900.

Work out the next time both bells ring together.

..... [3]

24



NOT TO
SCALE

Triangle ABC is mathematically similar to triangle DEF .

Calculate the value of x .

$x =$ [2]

BLANK PAGE

Permission to reproduce items where third-party owned material protected by copyright is included has been sought and cleared where possible. Every reasonable effort has been made by the publisher (UCLES) to trace copyright holders, but if any items requiring clearance have unwittingly been included, the publisher will be pleased to make amends at the earliest possible opportunity.

To avoid the issue of disclosure of answer-related information to candidates, all copyright acknowledgements are reproduced online in the Cambridge Assessment International Education Copyright Acknowledgements Booklet. This is produced for each series of examinations and is freely available to download at www.cambridgeinternational.org after the live examination series.

Cambridge Assessment International Education is part of Cambridge Assessment. Cambridge Assessment is the brand name of the University of Cambridge Local Examinations Syndicate (UCLES), which is a department of the University of Cambridge.